

PREFEITURA MUNICIPAL DE BOM JESUS DO ITABAPOANA-RJ
SECRETARIA MUNICIPAL DE EDUCAÇÃO, ESPORTE E LAZER

SEMEEL

A mudança está em nossas mãos

Atividades Orientadoras



**2º
ano**

Ensino Fundamental



UNIDADE ESCOLAR:

PROFESSOR(A) ANO DE ESCOLARIDADE DATA

NOME:

HOJE É?

SEGUNDA

TERÇA

QUARTA

QUINTA

SEXTA

CÓDIGO BNCC

EF02LP01.RJ

ABC LÍNGUA PORTUGUESA

LETRA CURSIVA – ALFABETO MAIÚSCULO E MINÚSCULO

CONFORME O ACORDO ORTOGRÁFICO DA LÍNGUA PORTUGUESA, APLICA-SE, EM REGRA, A LETRA MINÚSCULA, EXCETUADOS OS NOMES PRÓPRIOS, INCLUSIVE DE INSTITUIÇÕES, SÍMBOLOS E SIGLAS.

1. OBSERVE O MODELO DAS LETRAS CURSIVAS MAIÚSCULAS E COPIE-AS:

A B C D E F G

H I J K L M N


O P Q R S T U

V W X Y Z

2. OBSERVE O MODELO DAS LETRAS CURSIVAS MINÚSCULAS E COPIE-AS:

a	b	c	d	e	f	g
h	i	j	k	l	m	n
o	p	q	r	s	t	u
v	w	x	y	z		

3. OBSERVE O NOME DOS DESENHOS E SEPARE AS SÍLABAS:




tatu

--	--



bola

--	--



macaca

--	--	--



boneca

--	--	--

UNIDADE ESCOLAR:

PROFESSOR(A)

ANO DE ESCOLARIDADE

DATA

NOME:

HOJE É?

SEGUNDA

TERÇA

QUARTA

QUINTA

SEXTA

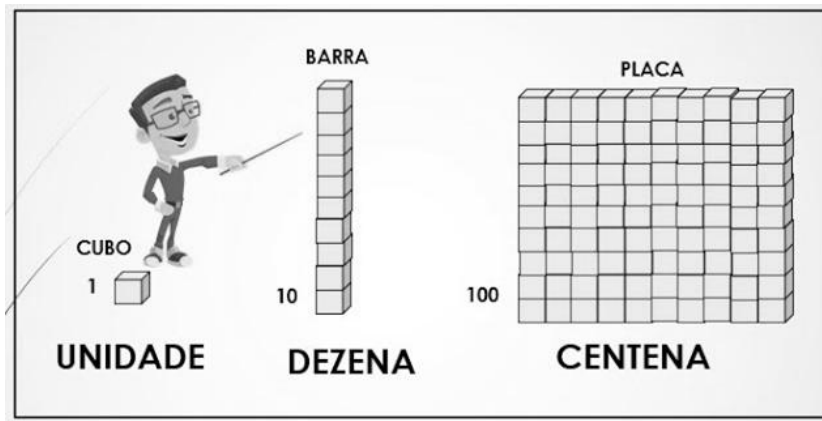
CÓDIGO BNCC

EF02MA01 / EF02MA02

123 MATEMÁTICA 123

CENTENA

NOME DADO AO AGRUPAMENTO DE 100 UNIDADES.

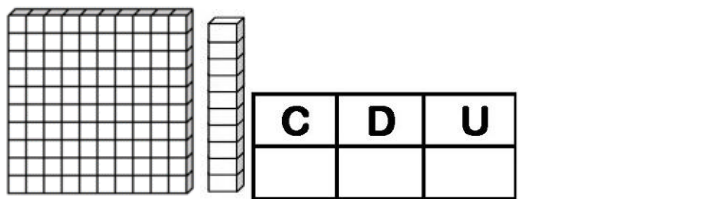
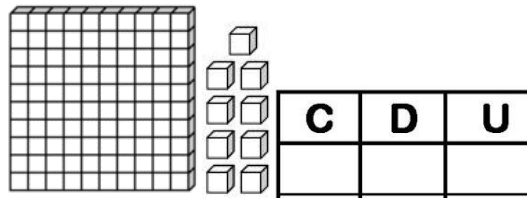
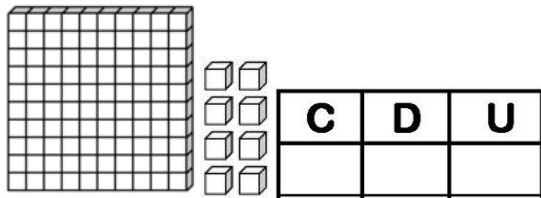


1. INDIQUE A QUANTIDADE REPRESENTADA PELO MATERIAL DOURADO:

	<table border="1"> <tr><td>C</td><td>D</td><td>U</td></tr> <tr><td></td><td></td><td></td></tr> </table>	C	D	U				_____
C	D	U						
	<table border="1"> <tr><td>C</td><td>D</td><td>U</td></tr> <tr><td></td><td></td><td></td></tr> </table>	C	D	U				_____
C	D	U						

	<table border="1"> <tr><td>C</td><td>D</td><td>U</td></tr> <tr><td></td><td></td><td></td></tr> </table>	C	D	U				_____
C	D	U						
	<table border="1"> <tr><td>C</td><td>D</td><td>U</td></tr> <tr><td></td><td></td><td></td></tr> </table>	C	D	U				_____
C	D	U						

	<table border="1"> <tr><td>C</td><td>D</td><td>U</td></tr> <tr><td></td><td></td><td></td></tr> </table>	C	D	U				_____
C	D	U						
	<table border="1"> <tr><td>C</td><td>D</td><td>U</td></tr> <tr><td></td><td></td><td></td></tr> </table>	C	D	U				_____
C	D	U						




100

2. DECOMPONHA OS NÚMEROS:

	CENTENA	DEZENA	UNIDADE
107			
105			
109			
103			
108			
110			

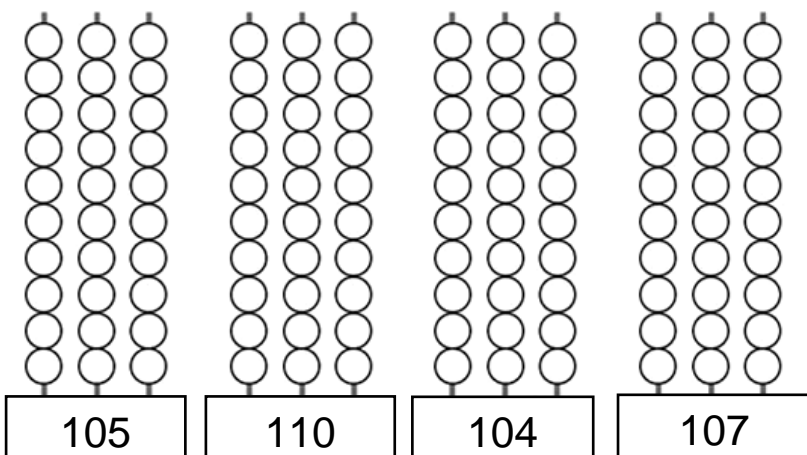


3. REPRESENTE OS NÚMEROS ESCRITOS POR EXTENSO:



• CENTO E UM	
• CENTO E DOIS	
• CENTO E TRÊS	
• CENTO E QUATRO	
• CENTO E CINCO	
• CENTO E SEIS	
• CENTO E SETE	
• CENTO E OITO	
• CENTO E NOVE	
• CENTO E DEZ	

4. REPRESENTE, NO ÁBACO, OS NÚMEROS INDICADOS.



UNIDADE ESCOLAR:

PROFESSOR(A) ANO DE ESCOLARIDADE DATA

2º ANO

NOME:

HOJE É?

SEGUNDA

TERÇA

QUARTA

QUINTA

SEXTA

CÓDIGO BNCC

EF02LP02.RJ

LÍNGUA PORTUGUESA


NÚMERO DO SUBSTANTIVO – SINGULAR E PLURAL

DIZEMOS QUE UMA PALAVRA ESTÁ NO SINGULAR QUANDO A MESMA FAZ REFERÊNCIA A APENAS **UMA COISA**. EXEMPLO: O CAVALO.

QUANDO TEMOS **DUAS OU MAIS COISAS**, USAMOS A PALAVRA NO PLURAL. EXEMPLO: OS CAVALOS.

1. LEIA O TEXTO E RESPONDA:

A ÁGUA



A ÁGUA É O BEM MAIS PRECIOSO DO PLANETA.

TODOS OS SERES VIVOS NECESSITAM DE ÁGUA PARA VIVER.

NÓS UTILIZAMOS A ÁGUA PARA QUASE TUDO EM NOSSAS VIDAS. ELA SERVE PARA BEBER, LAVAR, COZINHAR, ENTRE TANTAS OUTRAS COISAS.

A ÁGUA É USADA NAS INDÚSTRIAS, NAS CASAS, ESCOLAS, HOSPITAIS E EM OUTRO LUGAR ONDE HÁ PESSOAS.

FAZER O BOM USO DA ÁGUA É DEVER DE TODOS! O PLANETA AGRADECE!

2. DE ACORDO COM O TEXTO, QUAL O BEM MAIS PRECIOSO DO PLANETA?

- () OS ANIMAIS.
- () A ÁGUA.
- () AS INDÚSTRIAS.

3. O TEXTO ACIMA É:

- () UM POEMA.
- () TEXTO INFORMATIVO.
- () UMA RECEITA.




4. QUANTO AO NÚMERO, AS PALAVRAS PODEM ESTAR NO SINGULAR OU NO PLURAL. MARQUE A ALTERNATIVA CORRETA:

❖ O SINGULAR:

- () INDICA SOMENTE UM ELEMENTO.
- () INDICA DOIS OU MAIS ELEMENTOS.
- () INDICA SOMENTE QUATRO ELEMENTOS.

❖ O PLURAL:


- () INDICA NENHUM ELEMENTO.
- () INDICA DOIS OU MAIS ELEMENTOS.
- () INDICA SOMENTE UM ELEMENTO.



5. OBSERVE AS PALAVRAS RETIRADAS DO TEXTO E COLOQUE-AS NO PLURAL:

- ÁGUA - _____
- PLANETA - _____
- LUGAR - _____
- VIDA - _____
- DEVER - _____

6. VOLTE AO TEXTO E RETIRE 5 PALAVRAS ESCRITAS NO PLURAL.



7. CIRCULE AS PALAVRAS QUE ESTÃO NO PLURAL:

PÃO	MÃES	ÁRVORE	CÃO
ANIMAL	PORTÕES	ASAS	INDÚSTRIA
PEÃO	CASAS	BOTÃO	HOSPITAIS
	LIVRO		



UNIDADE ESCOLAR:

PROFESSOR(A)

ANO DE ESCOLARIDADE

DATA

NOME:

HOJE É?

SEGUNDA TERÇA QUARTA QUINTA SEXTA


















































































CÓDIGO BNCC








123 MATEMÁTICA 123

1. PINTE AS FICHAS DE ACORDO COM A LEGENDA:
































































<p>VERDE</p> <p> =100</p>	<p>VERMELHO</p> <p> =10</p>	<p>AZUL</p> <p> =1</p>
<p>C D U</p> <p>1 0 7</p>	<div style="border: 1px solid black; padding: 5px; display: flex; justify-content: space-around;"> <div style="border: 1px solid black; border-radius: 50%; width: 20px; height: 20px;"></div> <div style="border: 1px solid black; border-radius: 50%; width: 20px; height: 20px;"></div> <div style="border: 1px solid black; border-radius: 50%; width: 20px; height: 20px;"></div> <div style="border: 1px solid black; border-radius: 50%; width: 20px; height: 20px;"></div> <div style="border: 1px solid black; border-radius: 50%; width: 20px; height: 20px;"></div> <div style="border: 1px solid black; border-radius: 50%; width: 20px; height: 20px;"></div> <div style="border: 1px solid black; border-radius: 50%; width: 20px; height: 20px;"></div> <div style="border: 1px solid black; border-radius: 50%; width: 20px; height: 20px;"></div> <div style="border: 1px solid black; border-radius: 50%; width: 20px; height: 20px;"></div> <div style="border: 1px solid black; border-radius: 50%; width: 20px; height: 20px;"></div> </div>	
.....		
<p>C D U</p> <p>1 0 3</p>	<div style="border: 1px solid black; padding: 5px; display: flex; justify-content: space-around;"> <div style="border: 1px solid black; border-radius: 50%; width: 20px; height: 20px;"></div> <div style="border: 1px solid black; border-radius: 50%; width: 20px; height: 20px;"></div> <div style="border: 1px solid black; border-radius: 50%; width: 20px; height: 20px;"></div> <div style="border: 1px solid black; border-radius: 50%; width: 20px; height: 20px;"></div> <div style="border: 1px solid black; border-radius: 50%; width: 20px; height: 20px;"></div> <div style="border: 1px solid black; border-radius: 50%; width: 20px; height: 20px;"></div> <div style="border: 1px solid black; border-radius: 50%; width: 20px; height: 20px;"></div> <div style="border: 1px solid black; border-radius: 50%; width: 20px; height: 20px;"></div> <div style="border: 1px solid black; border-radius: 50%; width: 20px; height: 20px;"></div> <div style="border: 1px solid black; border-radius: 50%; width: 20px; height: 20px;"></div> </div>	
.....		
<p>C D U</p> <p>1 0 9</p>	<div style="border: 1px solid black; padding: 5px; display: flex; justify-content: space-around;"> <div style="border: 1px solid black; border-radius: 50%; width: 20px; height: 20px;"></div> <div style="border: 1px solid black; border-radius: 50%; width: 20px; height: 20px;"></div> <div style="border: 1px solid black; border-radius: 50%; width: 20px; height: 20px;"></div> <div style="border: 1px solid black; border-radius: 50%; width: 20px; height: 20px;"></div> <div style="border: 1px solid black; border-radius: 50%; width: 20px; height: 20px;"></div> <div style="border: 1px solid black; border-radius: 50%; width: 20px; height: 20px;"></div> <div style="border: 1px solid black; border-radius: 50%; width: 20px; height: 20px;"></div> <div style="border: 1px solid black; border-radius: 50%; width: 20px; height: 20px;"></div> <div style="border: 1px solid black; border-radius: 50%; width: 20px; height: 20px;"></div> <div style="border: 1px solid black; border-radius: 50%; width: 20px; height: 20px;"></div> </div>	
.....		
<p>C D U</p> <p>1 0 1</p>	<div style="border: 1px solid black; padding: 5px; display: flex; justify-content: space-around;"> <div style="border: 1px solid black; border-radius: 50%; width: 20px; height: 20px;"></div> <div style="border: 1px solid black; border-radius: 50%; width: 20px; height: 20px;"></div> <div style="border: 1px solid black; border-radius: 50%; width: 20px; height: 20px;"></div> <div style="border: 1px solid black; border-radius: 50%; width: 20px; height: 20px;"></div> <div style="border: 1px solid black; border-radius: 50%; width: 20px; height: 20px;"></div> <div style="border: 1px solid black; border-radius: 50%; width: 20px; height: 20px;"></div> <div style="border: 1px solid black; border-radius: 50%; width: 20px; height: 20px;"></div> <div style="border: 1px solid black; border-radius: 50%; width: 20px; height: 20px;"></div> <div style="border: 1px solid black; border-radius: 50%; width: 20px; height: 20px;"></div> <div style="border: 1px solid black; border-radius: 50%; width: 20px; height: 20px;"></div> </div>	
.....		
<p>C D U</p> <p>1 1 0</p>	<div style="border: 1px solid black; padding: 5px; display: flex; justify-content: space-around;"> <div style="border: 1px solid black; border-radius: 50%; width: 20px; height: 20px;"></div> <div style="border: 1px solid black; border-radius: 50%; width: 20px; height: 20px;"></div> <div style="border: 1px solid black; border-radius: 50%; width: 20px; height: 20px;"></div> <div style="border: 1px solid black; border-radius: 50%; width: 20px; height: 20px;"></div> <div style="border: 1px solid black; border-radius: 50%; width: 20px; height: 20px;"></div> <div style="border: 1px solid black; border-radius: 50%; width: 20px; height: 20px;"></div> <div style="border: 1px solid black; border-radius: 50%; width: 20px; height: 20px;"></div> <div style="border: 1px solid black; border-radius: 50%; width: 20px; height: 20px;"></div> <div style="border: 1px solid black; border-radius: 50%; width: 20px; height: 20px;"></div> <div style="border: 1px solid black; border-radius: 50%; width: 20px; height: 20px;"></div> </div>	
.....		
<p>C D U</p> <p>1 0 2</p>	<div style="border: 1px solid black; padding: 5px; display: flex; justify-content: space-around;"> <div style="border: 1px solid black; border-radius: 50%; width: 20px; height: 20px;"></div> <div style="border: 1px solid black; border-radius: 50%; width: 20px; height: 20px;"></div> <div style="border: 1px solid black; border-radius: 50%; width: 20px; height: 20px;"></div> <div style="border: 1px solid black; border-radius: 50%; width: 20px; height: 20px;"></div> <div style="border: 1px solid black; border-radius: 50%; width: 20px; height: 20px;"></div> <div style="border: 1px solid black; border-radius: 50%; width: 20px; height: 20px;"></div> <div style="border: 1px solid black; border-radius: 50%; width: 20px; height: 20px;"></div> <div style="border: 1px solid black; border-radius: 50%; width: 20px; height: 20px;"></div> <div style="border: 1px solid black; border-radius: 50%; width: 20px; height: 20px;"></div> <div style="border: 1px solid black; border-radius: 50%; width: 20px; height: 20px;"></div> </div>	
.....		
<p>C D U</p> <p>1 0 6</p>	<div style="border: 1px solid black; padding: 5px; display: flex; justify-content: space-around;"> <div style="border: 1px solid black; border-radius: 50%; width: 20px; height: 20px;"></div> <div style="border: 1px solid black; border-radius: 50%; width: 20px; height: 20px;"></div> <div style="border: 1px solid black; border-radius: 50%; width: 20px; height: 20px;"></div> <div style="border: 1px solid black; border-radius: 50%; width: 20px; height: 20px;"></div> <div style="border: 1px solid black; border-radius: 50%; width: 20px; height: 20px;"></div> <div style="border: 1px solid black; border-radius: 50%; width: 20px; height: 20px;"></div> <div style="border: 1px solid black; border-radius: 50%; width: 20px; height: 20px;"></div> <div style="border: 1px solid black; border-radius: 50%; width: 20px; height: 20px;"></div> <div style="border: 1px solid black; border-radius: 50%; width: 20px; height: 20px;"></div> <div style="border: 1px solid black; border-radius: 50%; width: 20px; height: 20px;"></div> </div>	














2. CONTE AS FIGURAS DA TABELA E REGISTRE A QUANTIDADE:

3. ENCONTRE A POSIÇÃO DOS EMOJIS COMO NO EXEMPLO:

	1	2	3	4	5	6	7	8	9
A									
B									
C									
D									
E									
F									
G									

 C 8













UNIDADE ESCOLAR:

PROFESSOR(A)

ANO DE ESCOLARIDADE
2º ANO

DATA

NOME:

HOJE É?

SEGUNDA TERÇA QUARTA QUINTA SEXTA

CÓDIGO BNCC

EF15LP05

LÍNGUA PORTUGUESA

1. A PROFESSORA E A TURMA FARÃO, COLETIVAMENTE, UM TEXTO SOBRE A IMAGEM ABAIXO:



LER E ESCREVER SÃO AS MELHORES BRINCADEIRAS!