

PREFEITURA MUNICIPAL DE BOM JESUS DO ITABAPOANA-RJ
SECRETARIA MUNICIPAL DE EDUCAÇÃO, ESPORTE E LAZER

SEMEEL

A mudança está em nossas mãos

Atividades Orientadoras



1º
ano

Ensino Fundamental

UNIDADE ESCOLAR:

PROFESSOR(A)

ANO DE ESCOLARIDADE DATA

1º ANO

NOME:

HOJE É?

SEGUNDA

TERÇA

QUARTA

QUINTA

SEXTA

CÓDIGO BNCC

EF01LP16/EF12LP03/EF01LP06/EF01LP07

LÍNGUA PORTUGUESA

LINGUAGEM E LEITURA ORAL E ESCRITA


1. LEIA O TRAVA-LÍNGUA JUNTO COM A PROFESSORA E RESPONDA.

– ALÔ, O TATU TÁ AÍ?
– NÃO, O TATU NÃO TÁ!
MAS A MULHER DO TATU TANDO,
É O MESMO QUE O TATU TÁ.



2. PINTE OS ESPAÇOS ENTRE AS PALAVRAS E COPIE O TEXTO NO ESPAÇO ABAIXO:


3. LEIA, SEPRE AS SÍLABAS E OS SONS DAS PALAVRAS ABAIXO.



TATU

□ □


□ □ □ □



TUBARÃO

□ □ □

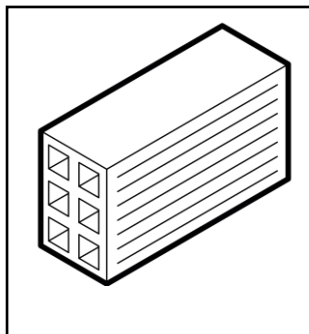
□ □ □ □ □ □ □ □



MOTO

□ □


□ □ □ □



TIJOLO

□ □ □

□ □ □ □ □ □ □ □



TELEVISÃO

□ □ □ □

□ □ □ □ □ □ □ □ □ □




4. CAÇA-PALAVRAS SILÁBICO:

BATATA



TELEFONE



TATU



TAPETE



TAÇA



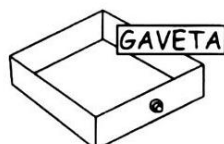
GOTA



GATO



TUCANO




GAVETA



GATA

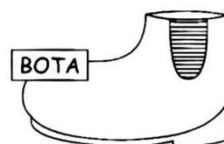
DA	TEI	CA	FE	BI	TE
JA	A	GA	VE	TA	LE
TA	DE	TU	LI	PA	FO
ÇA	BU	DI	GA	BE	NE
ME	TA	LO	TO	BA	CO
SE	TU	DO	TU	TA	TO
TA	LU	GO	CA	TA	MA
PE	TI	TA	NO	RE	TE
TE	JO	DU	SI	PA	BO
NO	LO	BA	RU	GA	TA



TIJOLO



TOMATE



BOTA



TEIA

UNIDADE ESCOLAR:

PROFESSOR(A)

ANO DE ESCOLARIDADE

DATA

NOME:

HOJE É?

SEGUNDA

TERÇA

QUARTA

QUINTA

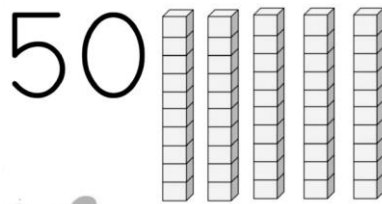
SEXTA

CÓDIGO BNCC

EFO1MA01/EFO1MA06

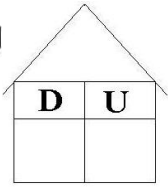
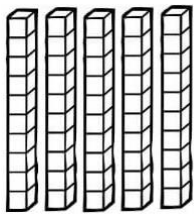
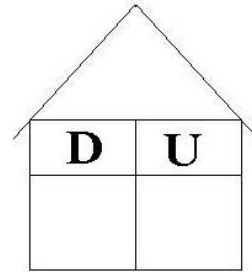
123 MATEMÁTICA 123

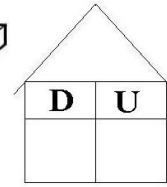
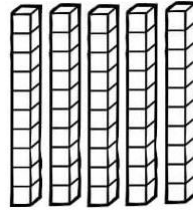
5 DEZENAS = 50 UNIDADES = CINQUENTA

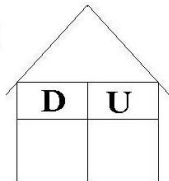
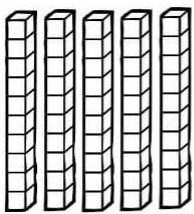


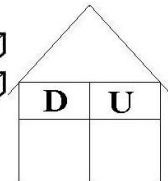
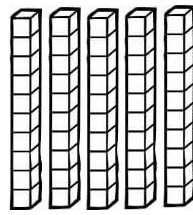
CINQUENTA

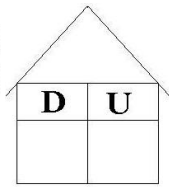
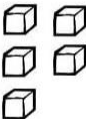
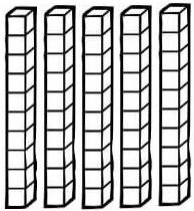
50 51 52 53 54 55 56 57 58 59

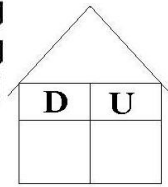
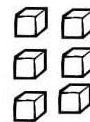
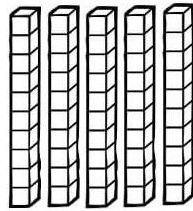


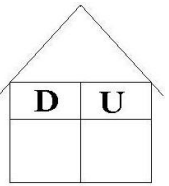
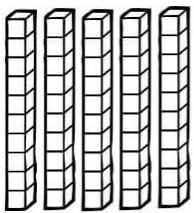


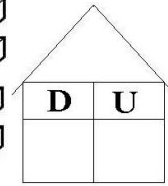
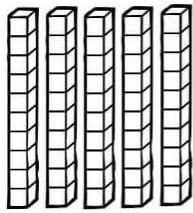



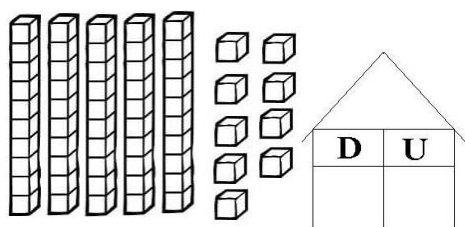













1. ESCREVA POR EXTENSO:

- 50 - _____
- 51 - _____
- 52 - _____
- 53 - _____
- 54 - _____
- 55 - _____
- 56 - _____
- 57 - _____
- 58 - _____
- 59 - _____



2. COLOQUE OS NÚMEROS NO QVL E CALCULE AS CONTINHAS:

$22 + 23 =$

$13 + 12 =$

$21 + 13 =$

$10 + 20 =$

$11 + 15 =$

$12 + 10 =$

D	U

D	U

D	U

D	U

D	U

D	U

$20 + 30 =$

$23 + 5 =$

$25 + 11 =$

$22 + 3 =$

$40 + 1 =$

$35 + 4 =$

D	U

D	U

D	U

D	U

D	U

D	U



UNIDADE ESCOLAR:

PROFESSOR(A)

ANO DE ESCOLARIDADE

1º ANO

DATA

NOME:

HOJE É?

SEGUNDA

TERÇA

QUARTA

QUINTA

SEXTA

CÓDIGO BNCC

EF01LP16/EF15LP18/EF02LP02/EF01LP09

LÍNGUA PORTUGUESA

LINGUAGEM, LEITURA ORAL E ESCRITA

1. LEIA O TEXO JUNTO COM A PROFESSORA E RESPONDA:

O TATU, A CUTIA E O TUCANO

O TATU TOCA TUBA NA MATA.

A CUTIA FALA TODA ANIMADA:

– O TATU TOCA TUBO TÃO BONITO!

O TUCANO RI DA CUTIA:

– NÃO É TUBO. É TUBA, DONA PACA!



A CUTIA RI MUITO DO TUCANO:

– SEU TUCANO! EU NÃO SOU PACA.

EU SOU CUTIA!



2. ESCREVA O NOME DOS PERSONAGENS DO TEX TO:



3. LEIA AS PALAVRAS ABAIXO E ESCREVA-AS DE ACORDO COM O QUE PEDE A ESTRUTURA:

CUTIA – BONITO – MATA – TÃO – TUCANO – TATU

C = CONSOANTE V = VOGAL

C + V + C + V + C + V = _____

C + V + C + V = _____

C + V + C + V + V = _____

C + V + V = _____

C + V + C + V = _____

C + V + C + V + C + V = _____




4. COPIE AS FRASES SUBSTITUINDO AS FIGURAS POR SEUS NOMES.

A



ESTÁ LIGADA NA



.

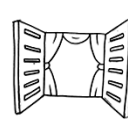
A



TEM UMA



E DUAS



.

TITIA FEZ SALADA DE



E



.

UNIDADE ESCOLAR:

PROFESSOR(A) ANO DE ESCOLARIDADE DATA

1º ANO

NOME:

HOJE É?

SEGUNDA

TERÇA

QUARTA

QUINTA

SEXTA

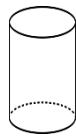
CÓDIGO BNCC

EF01MA13/EF01MA14

123 MATEMÁTICA 123

FORMAS GEOMÉTRICAS ESPACIAIS

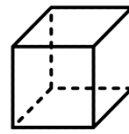
SÃO AQUELAS QUE TÊM TRÊS DIMENSÕES: COMPRIMENTO, ALTURA E LARGURA.



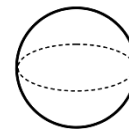
CILINDRO



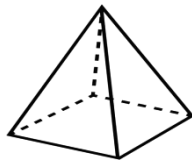
CONE



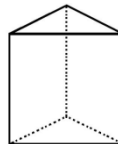
CUBO



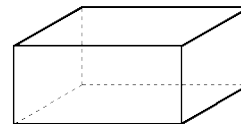
ESFERA



PIRÂMIDE



PRISMA

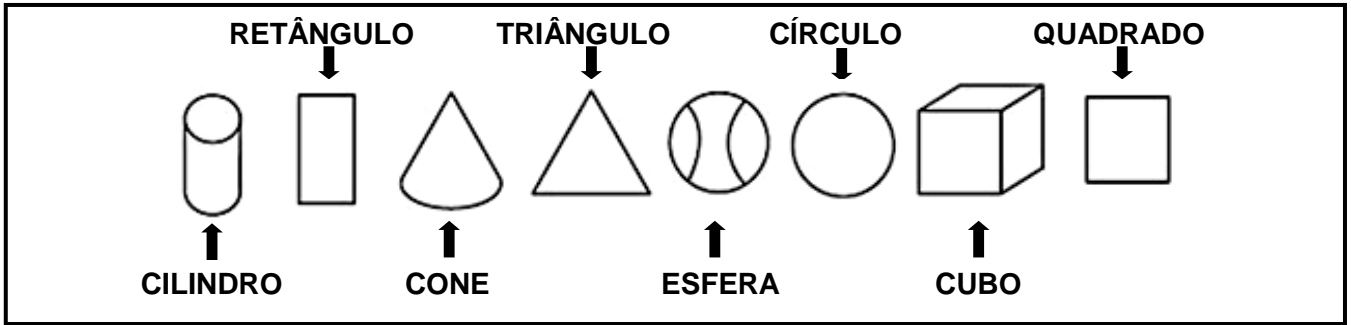


PARALELEPÍPEDO

1. OBSERVE OS OBJETOS ABAIXO E COLOQUE O NOME DOS SÓLIDOS GEOMÉTRICOS QUE ELES LEMBRAM.

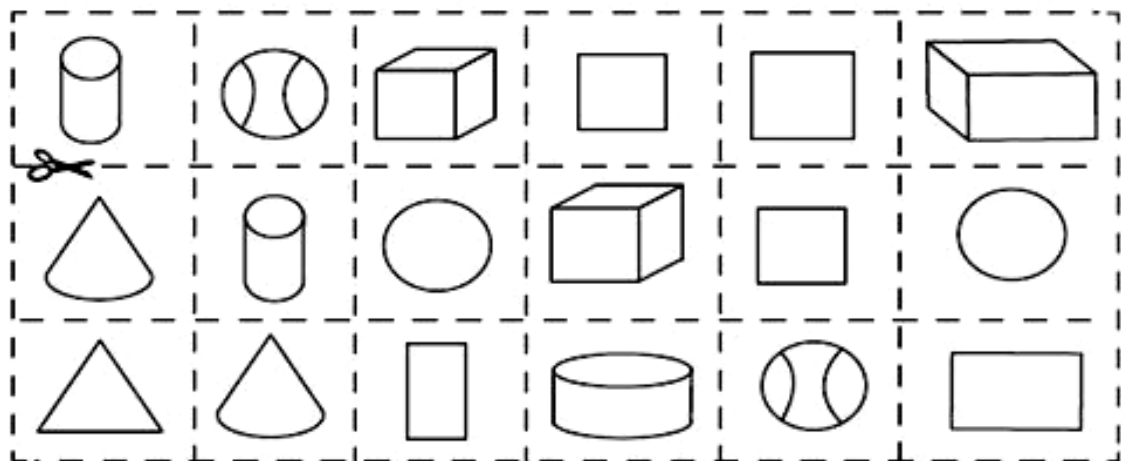


FIGURAS PLANAS SÃO DIFERENTES DE SÓLIDOS GEOMÉTRICOS



2. RECORTE E COLE NO ESPAÇO ABAIXO AS FIGURAS EM DESTAQUE:

FIGURAS PLANAS	SÓLIDOS GEOMÉTRICOS



UNIDADE ESCOLAR:

PROFESSOR(A)

ANO DE ESCOLARIDADE

1º ANO

DATA

NOME:

HOJE É?

SEGUNDA

TERÇA

QUARTA

QUINTA

SEXTA

CÓDIGO BNCC

EF15LP05

LÍNGUA PORTUGUESA

PRODUÇÃO DE TEXTO

1. ORDENE CORRETAMENTE AS TIRINHAS DO TEXTO, RECORTE E COLE-AS:

O TATU, A CUTIA E O TUCANO

– O TATU TOCA TUBO TÃO BONITO!

O TUCANO RI DA CUTIA:

– NÃO É TUBO. É TUBA, DONA PACA!

A CUTIA FALA TODA ANIMADA:

A CUTIA RI MUITO DO TUCANO:

– SEU TUCANO! EU NÃO SOU PACA. EU SOU CUTIA!

O TATU TOCA TUBA NA MATA.